

Dear Parents,

I am very excited about your child entering 2<sup>nd</sup> grade in the fall. It is imperative that students do not forget the skills they have learned over the past year. I have prepared a summer packet to help ensure their literacy and math skills remain strong over the summer so they will be better prepared for 2<sup>nd</sup> grade. Please spend some time this summer preparing your child for the next school year. Students can return the packets the first week of school. I hope everyone has a wonderful summer and I look forward to a great new school year!

God Bless,

Mrs. Marco





# Making 10

Write the number.

$1 + \underline{\quad} = 10$

$10 + \underline{\quad} = 10$

$3 + \underline{\quad} = 10$

$7 + \underline{\quad} = 10$

$2 + \underline{\quad} = 10$


$6 + \underline{\quad} = 10$

$4 + \underline{\quad} = 10$

$9 + \underline{\quad} = 10$

$5 + \underline{\quad} = 10$

$8 + \underline{\quad} = 10$



# Fact Family

6

4                      10

\_\_\_\_\_ + \_\_\_\_\_ = \_\_\_\_\_

\_\_\_\_\_ + \_\_\_\_\_ = \_\_\_\_\_

\_\_\_\_\_ - \_\_\_\_\_ = \_\_\_\_\_

\_\_\_\_\_ - \_\_\_\_\_ = \_\_\_\_\_

7


15                      8

\_\_\_\_\_ + \_\_\_\_\_ = \_\_\_\_\_

\_\_\_\_\_ + \_\_\_\_\_ = \_\_\_\_\_

\_\_\_\_\_ - \_\_\_\_\_ = \_\_\_\_\_

\_\_\_\_\_ - \_\_\_\_\_ = \_\_\_\_\_



## Synonyms

Find and write a synonym for each word.

tired	fast	tiny	start
sick	glad	nice	shout

begin \_\_\_\_\_

sleepy \_\_\_\_\_

kind \_\_\_\_\_


happy \_\_\_\_\_

small \_\_\_\_\_

quick \_\_\_\_\_

ill \_\_\_\_\_

yell \_\_\_\_\_



## Word Problem

Helen had 4 bear stickers, 6 rabbit stickers, and 7 koala stickers. How many stickers did she have?

Answer: \_\_\_\_\_ stickers

Show your work.

Penny, Tom, and Kim each ate 3 pieces of cake. How many pieces did they eat altogether?

Answer: \_\_\_\_\_ pieces of cake

Show your work.


Name: \_\_\_\_\_

Date: \_\_\_\_\_

Directions: Read the passage 3 times. Color a crayon each time you read. Then, complete the tasks and color the picture.

## Giraffes

Did you know that giraffes are the tallest animals in the world? They can grow to be around 19 feet tall and weigh around 2,800 pounds. Giraffes live in the grasslands of Africa. They can live to be around 25 years old in the wild. Giraffes are herbivores. That means they eat plants rather than meat. Giraffes have spotted fur. No two giraffes look alike.



Color the sentence that tells how tall giraffes can grow.

Color the sentence that tells where giraffes live.

Color the sentence that tells what giraffes eat.

Name: \_\_\_\_\_ Date: \_\_\_\_\_

## Sequencing Events

Whitney is going on a field trip to the zoo. The bus arrives at school to pick up the students. At the zoo the students have to buy tickets to get in the gate. The first thing Whitney sees are the elephants. She feeds them peanuts. Next, Whitney see the lions. There are three lions in the den. Then, Whitney walks to see the giraffes. Whitney gets to pet the giraffe's long neck. This is her favorite part of the day. After, Whitney eats lunch. She packed a jelly sandwich. Finally, it is time to go back to school.

Write 1-5 on the line to put the events from the story in order.

\_\_\_\_\_ Whitney gets to pet a giraffe.

\_\_\_\_\_ She eats a jelly sandwich.

\_\_\_\_\_ Whitney sees the elephants.

\_\_\_\_\_ The bus arrives at the school.

\_\_\_\_\_ The students buy tickets.

# 2<sup>nd</sup> Grade Summer Packet



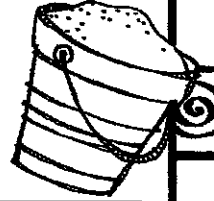
**Directions:** Fill in the blanks with the missing numbers.

45, \_\_\_\_\_, 55, 60, \_\_\_\_\_, \_\_\_\_\_, 75, \_\_\_\_\_, 85, 90, 95 \_\_\_\_\_, \_\_\_\_\_, \_\_\_\_\_, 115

32, \_\_\_\_\_, 36, \_\_\_\_\_, 40, \_\_\_\_\_, 44, \_\_\_\_\_, 48, \_\_\_\_\_, 52, \_\_\_\_\_, \_\_\_\_\_, 58, \_\_\_\_\_

\_\_\_\_\_, 60, 70, \_\_\_\_\_, 90, \_\_\_\_\_, 110, \_\_\_\_\_, \_\_\_\_\_, \_\_\_\_\_, 160, \_\_\_\_\_, 180

47, \_\_\_\_\_, 67, \_\_\_\_\_, 87, \_\_\_\_\_, 107, \_\_\_\_\_, 127, \_\_\_\_\_, \_\_\_\_\_, 157, \_\_\_\_\_, 177



**Directions:** Fill in the missing numbers in the hundred chart sections.

	57	
66	67	68
	77	


73	74	
	84	
	94	95



10		12
30		32

73	74	
	84	
	94	95

**Directions:** Answer each number sentence.



40 + 20 = \_\_\_\_\_    80 + 10 = \_\_\_\_\_    20 + 20 = \_\_\_\_\_    50 + 30 = \_\_\_\_\_

10 + 50 = \_\_\_\_\_    10 + 40 = \_\_\_\_\_    70 + 30 = \_\_\_\_\_    30 + 20 = \_\_\_\_\_

**Directions:** Answer each number sentence.

90 - 20 = \_\_\_\_\_    80 - 40 = \_\_\_\_\_    30 - 30 = \_\_\_\_\_    40 - 30 = \_\_\_\_\_

70 - 30 = \_\_\_\_\_    70 - 50 = \_\_\_\_\_    60 - 30 = \_\_\_\_\_    40 - 20 = \_\_\_\_\_



# 2<sup>nd</sup> Grade Summer Packet

**Directions:** Circle the words that need capital letters.

boat

january

ship

tuesday

calendar

house

bookcase

march

basket

monday

golf

basketball

ocean

may

banana

bag

shirt

wednesday

**Directions:** Complete each sentence by adding a period (.), exclamation point (!), or question mark (?).

When is your birthday \_\_\_\_\_

We had pizza for lunch \_\_\_\_\_ Oh no \_\_\_\_\_

The giraffe is my favorite animal \_\_\_\_\_

I love ice cream \_\_\_\_\_

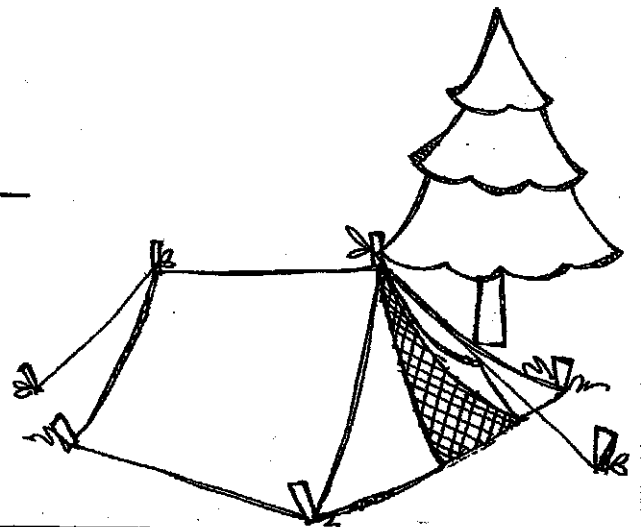

May I have a glass of water \_\_\_\_\_

It's too hot \_\_\_\_\_

What are you reading this summer \_\_\_\_\_

Are you going to the beach or the movies \_\_\_\_\_

My favorite subject is reading \_\_\_\_\_



# 2<sup>nd</sup> Grade Summer Packet

**Directions:** Read the text below, then answer the questions.

## The Water Park


My name is Janet and I had so much fun this summer! I went to visit my Grandma in Florida. We went to the biggest water park I have ever seen.

When I arrived at Grandma's house the first thing I did was unpack my bag. After I unpacked, Grandma gave me a snack of cookies and milk. I was really hungry.

After my snack I put my swimsuit and flip flops on to go to the water park. Grandma and I went in the car and drove to the water park.

The water park was huge! There were lots of water slides and a huge swimming pool. I put my towel down and got in line for the big water slide. The slide was so fast. We went from side to side through the water. After the water slide I went in the swimming pool. I splashed Grandma and floated on my back. Soon I was getting tired.

At the end of the day Grandma and I got back in the car and drove home. When we got home I was so tired I decided to take a nap. Grandma and I had the best day!





# 2<sup>nd</sup> Grade Summer Packet

**Directions:** Answer the questions in complete sentences.

1. Where did the author go during the summer?

---

2. What was the first thing Janet did when she arrived at Grandma's house?

---

3. Why did Granma give Janet cookies and milk?

---

4. When Janet got to the water park, what was the first thing she did?

---

5. Why did the author write this text?

---

6. Who are the main characters?

---

7. How does the story end?

---

8. Write a new ending for the story. Where does Janet go next? Write about her next adventure.

---





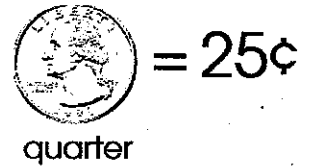
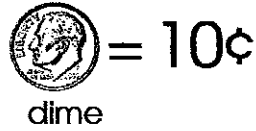
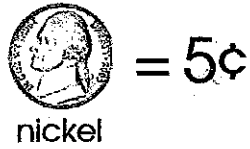
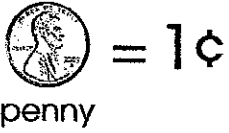
---

---


---

# Adding Coins

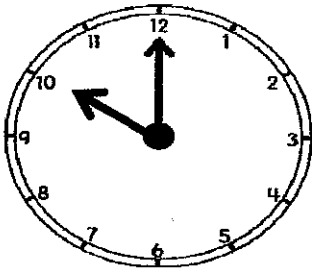
Add the coins in each piggy bank and write the total amount in the box.



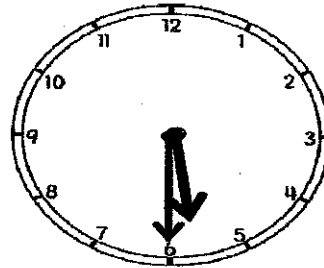
# 2<sup>nd</sup> Grade Summer Packet



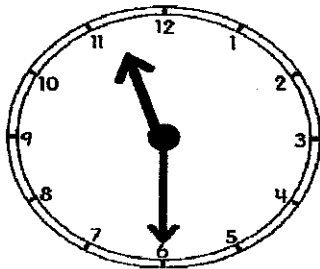
Directions: Write the time on the lines.




\_\_\_\_\_



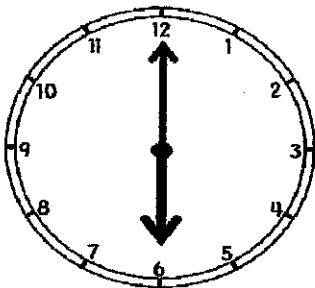
\_\_\_\_\_



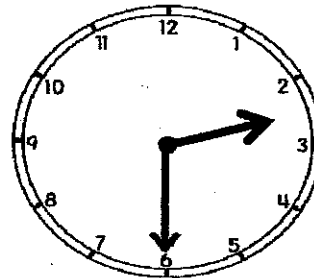
\_\_\_\_\_






\_\_\_\_\_




\_\_\_\_\_



\_\_\_\_\_



# Addition Worksheet



1 a. 
$$\begin{array}{r} 54 \\ + 23 \\ \hline \end{array}$$

1 b. 
$$\begin{array}{r} 36 \\ + 42 \\ \hline \end{array}$$

1 c. 
$$\begin{array}{r} 24 \\ + 45 \\ \hline \end{array}$$

2 a. 
$$\begin{array}{r} 35 \\ + 32 \\ \hline \end{array}$$

2 b. 
$$\begin{array}{r} 18 \\ + 11 \\ \hline \end{array}$$

2 c. 
$$\begin{array}{r} 37 \\ + 50 \\ \hline \end{array}$$

3 a. 
$$\begin{array}{r} 10 \\ + 51 \\ \hline \end{array}$$


3 b. 
$$\begin{array}{r} 16 \\ + 62 \\ \hline \end{array}$$

3 c. 
$$\begin{array}{r} 70 \\ + 29 \\ \hline \end{array}$$

4 a. 
$$\begin{array}{r} 11 \\ + 85 \\ \hline \end{array}$$

4 b. 
$$\begin{array}{r} 42 \\ + 36 \\ \hline \end{array}$$

4 c. 
$$\begin{array}{r} 11 \\ + 21 \\ \hline \end{array}$$



# Math Worksheet

$$\begin{array}{r} 1 \text{ a.} \quad 56 \\ - 13 \\ \hline \end{array}$$

$$\begin{array}{r} 1 \text{ b.} \quad 27 \\ - 11 \\ \hline \end{array}$$

$$\begin{array}{r} 1 \text{ c.} \quad 18 \\ - 12 \\ \hline \end{array}$$

$$\begin{array}{r} 2 \text{ a.} \quad 37 \\ - 27 \\ \hline \end{array}$$

$$\begin{array}{r} 2 \text{ b.} \quad 28 \\ - 28 \\ \hline \end{array}$$

$$\begin{array}{r} 2 \text{ c.} \quad 28 \\ - 12 \\ \hline \end{array}$$

$$\begin{array}{r} 3 \text{ a.} \quad 73 \\ - 60 \\ \hline \end{array}$$

$$\begin{array}{r} 3 \text{ b.} \quad 13 \\ - 11 \\ \hline \end{array}$$

$$\begin{array}{r} 3 \text{ c.} \quad 88 \\ - 37 \\ \hline \end{array}$$

$$\begin{array}{r} 4 \text{ a.} \quad 55 \\ - 44 \\ \hline \end{array}$$

$$\begin{array}{r} 4 \text{ b.} \quad 42 \\ - 31 \\ \hline \end{array}$$

$$\begin{array}{r} 4 \text{ c.} \quad 18 \\ - 11 \\ \hline \end{array}$$

$$\begin{array}{r} 5 \text{ a.} \quad 85 \\ - 24 \\ \hline \end{array}$$

$$\begin{array}{r} 5 \text{ b.} \quad 58 \\ - 37 \\ \hline \end{array}$$

$$\begin{array}{r} 5 \text{ c.} \quad 33 \\ - 23 \\ \hline \end{array}$$

